


RECOGNISING & IDENTIFYING

FRACTIONS

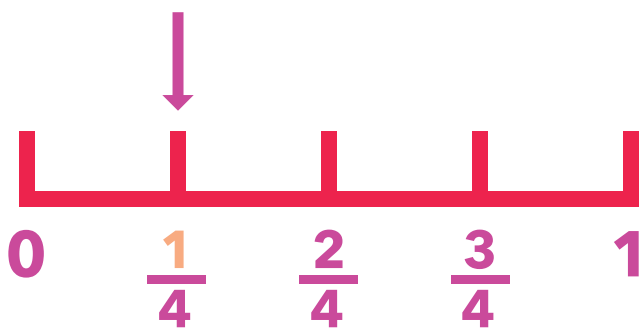
WRITTEN

$$\frac{1}{4}$$

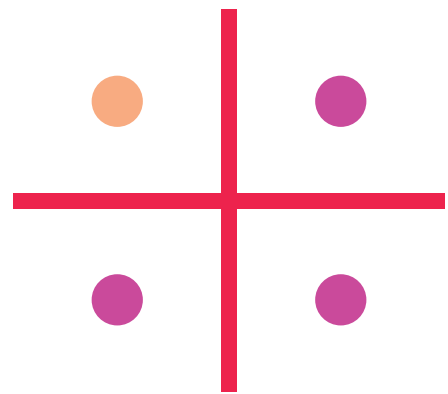
SHAPE



NUMBER LINE



GROUP



FRACTION OF A NUMBER

$$\frac{1}{4} \text{ of } 24$$

$$24 \div 4 = 6$$

$$\frac{3}{4} \text{ of } 24$$

$$24 \div 4 = 6 \rightarrow 6 \times 3 = 18$$

RECOGNISING & IDENTIFYING

FRACTIONS

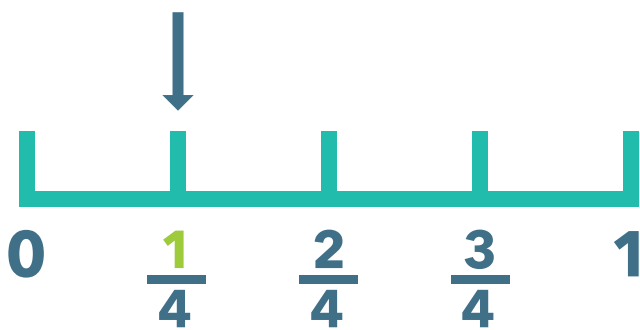
WRITTEN

$$\frac{1}{4}$$


SHAPE



NUMBER LINE



GROUP



FRACTION OF A NUMBER

$$\frac{1}{4} \text{ of } 24$$

$$24 \div 4 = 6$$

$$\frac{3}{4} \text{ of } 24$$

$$24 \div 4 = 6 \rightarrow 6 \times 3 = 18$$


RECOGNISING & IDENTIFYING

FRACTIONS

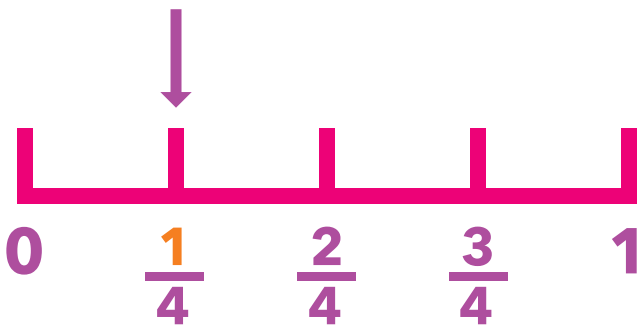
WRITTEN

$$\frac{1}{4}$$

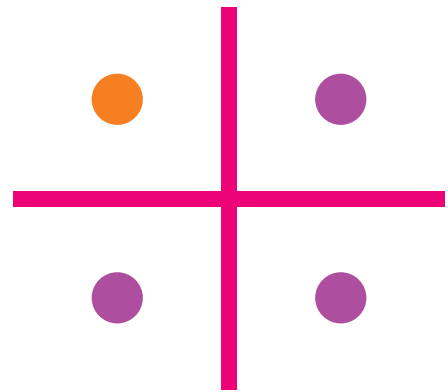
SHAPE



NUMBER LINE



GROUP



FRACTION OF A NUMBER

$$\frac{1}{4} \text{ of } 24$$

$$24 \div 4 = 6$$

$$\frac{3}{4} \text{ of } 24$$

$$24 \div 4 = 6 \rightarrow 6 \times 3 = 18$$